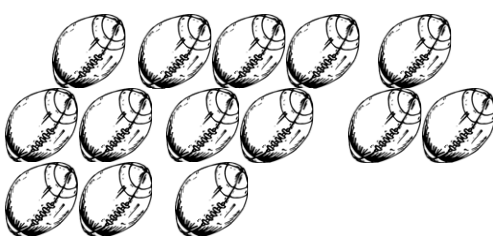



Exercise 1 in Natural Numbers

Count and write the number.


<p>1. _____ ----- _____</p> 	<p>2. _____ ----- _____</p> 
---	--

Fill in the missing numbers.

3. Between 16, _____, 18	4. Just after 14, 15, _____
5. Between 14, _____, 16	6. Just before and after _____, 19, _____

Circle the set that has fewer.

7.



Circle the smaller number.

8. 37 39	9. 1 42	10. 47 14
11. 10 15	12. 19 16	13. 44 33

Fill in the missing numbers.

14. Just before _____, 4, 5	15. Between 8, _____, 10
16. Just before and after _____, 3, _____	17. Between 6, _____, 8

Order each group of numbers from smallest to largest.

18. 78, 92, 85, 29 _____, _____, _____, _____
19. 6, 96, 69, 21 _____, _____, _____, _____

Name _____

Date _____

Mixed Review: Exercise 2 in Natural Numbers

Fill in the missing number.

3. ___ ten and 7 ones = 17	4. 0 tens and 6 ones = _____
5. 6 tens and ___ ones = 68	6. 5 tens and 0 ones = _____

Order each group of numbers from smallest to largest.

7. 90, 69, 71, 76	_____, _____, _____, _____
8. 96, 86, 88, 78	_____, _____, _____, _____
9. 94, 49, 58, 4	_____, _____, _____, _____

Circle the larger number in each set.

10. 1 ten and 6 ones	2 tens and 5 ones	11. 4 tens and 0 ones	3 tens and 2 ones
12. 6 tens	3 tens and 8 ones	13. 13	2 tens and 7 ones

Fill in the missing numbers to complete the subtraction fact.

14. $\begin{array}{r} \square \\ - \quad 4 \\ \hline 1 \end{array}$	15. $\begin{array}{r} 6 \\ - \quad \square \\ \hline 4 \end{array}$	16. $\begin{array}{r} \square \\ - \quad 3 \\ \hline 2 \end{array}$
--	--	--

Write the sum.

19. 5 + 5 = _____	20. 1 + 7 = _____	21. 4 + 2 = _____
----------------------	----------------------	----------------------

Fill in the missing numbers.

22. Just before _____, 8, 9	23. Between 9, _____, 11
24. Just after 18, 19, _____	25. Between 5, _____, 7

